
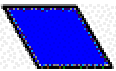






Name:
Date:
Class:



Determining Relationship Worksheet (PDF)



1. How many  are in  ?



2. How many  are in  ?



3. How many  are in  ?



4. How many  are in  ?



5. How many  are in  ?

6. How many  are in  ?

7. If  = 1,  = _____.

8. If  = 1,  = _____.

9. If  = 1,  = _____.

10. If  = 1,  = _____.